



Reading Volume

Grade 6

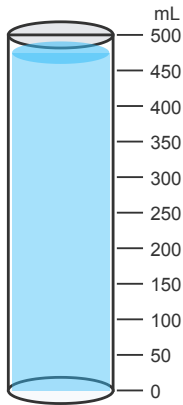
Name: _____

Read each cylinder and write the volume.


Read the measurement at the bottom of the meniscus (the curve of the liquid).

Example: Volume = 50 mL

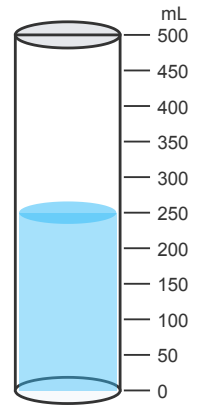
(1)




(2)




(3)



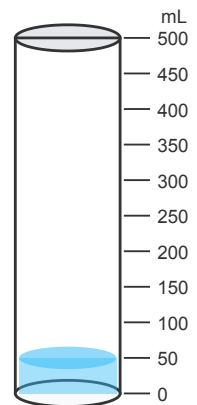
(4)



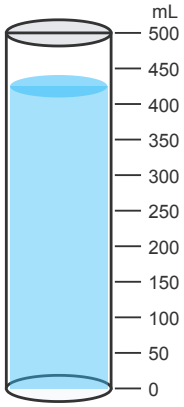
(5)



(6)



(7)



(8)

