



Faces, Edges & Vertices

Kindergarten

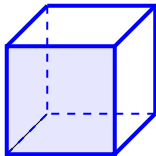
Name: _____

Count the faces, edges, and vertices.

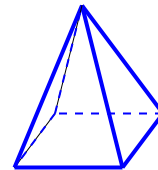
Faces: flat surfaces. Edges: where two faces meet. Vertices: corners where edges meet.

Example: A cube has 6 faces

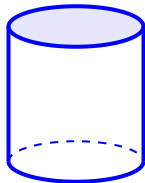
(1) How many vertices does
this shape have? _____



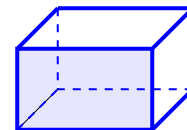
(2) How many faces does this
shape have? _____



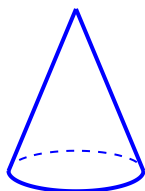
(3) How many edges does this
shape have? _____



(4) How many vertices does
this shape have? _____



(5) How many faces does this
shape have? _____



(6) How many edges does this
shape have? _____

