



Identify 2D Shapes


Kindergarten

Name: _____

Name the shape shown.


Identify the shape by counting its sides and corners.

(1)



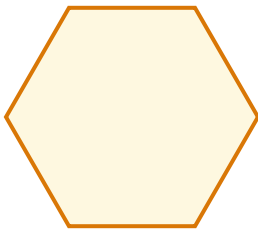
- (A) diamond (B) hexagon
(C) parallelogram (D) trapezoid

(2)




- (A) circle (B) oval (C) parallelogram
(D) trapezoid

(3)



- (A) circle (B) hexagon
(C) parallelogram (D) trapezoid

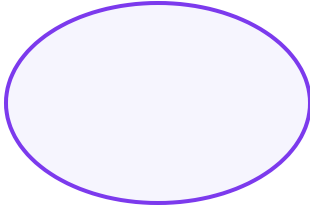
(4)



- (A) oval (B) parallelogram
(C) rectangle (D) triangle



(5)




- (A) diamond (B) oval (C) rectangle
(D) triangle

(6)



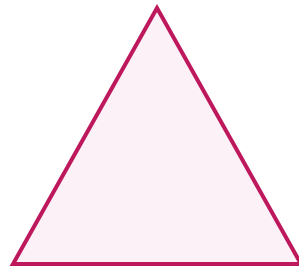
- (A) hexagon (B) pentagon (C) square
(D) triangle

(7)



- (A) circle (B) oval (C) rectangle
(D) trapezoid

(8)



- (A) diamond (B) parallelogram
(C) rectangle (D) triangle

