



Identifying 3D Shapes

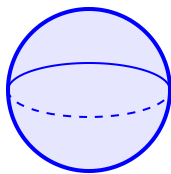
Kindergarten

Name: _____

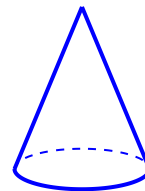
Name the three-dimensional shape.

Cube: 6 square faces. Sphere: round like a ball. Cylinder: like a can. Cone: like an ice cream cone. Rectangular Prism: like a box. Pyramid: square base, point at top.

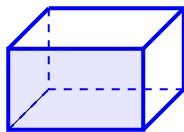
(1) This shape is a



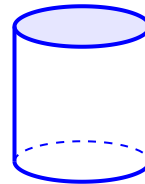
(2) What is this 3D shape?



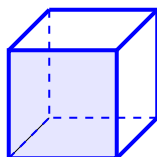
(3) Name the 3D shape:



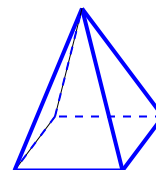
(4) Look at the shape. It is a



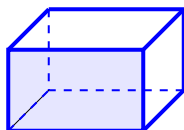
(5) This is a



(6) Can you name this shape?



(7) What shape do you see?



(8) Is this a sphere or a cube?

It is a

