




Identifying Shapes

Kindergarten

Name: _____

Identify the shape. Choose the name.

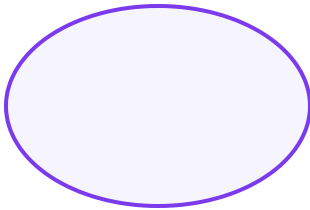
Count the sides and corners of each shape to help identify it. Remember: triangles have 3 sides, quadrilaterals have 4.



Example: What shape is this?

Answer: Square


(1)



(A) oval (B) parallelogram

(C) pentagon (D) triangle

(2)

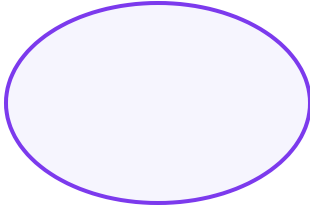


(A) circle (B) diamond (C) pentagon

(D) trapezoid




(3)




- (A) diamond (B) hexagon (C) oval
(D) pentagon

(4)




- (A) diamond (B) hexagon
(C) parallelogram (D) square

(5)



- (A) diamond (B) pentagon (C) square
(D) trapezoid


(6)



- (A) diamond (B) rectangle
(C) trapezoid (D) triangle

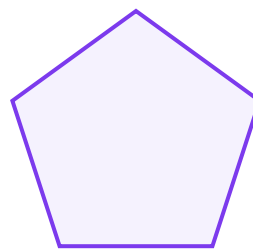


(7)



- (A) oval (B) pentagon (C) rectangle
(D) square

(8)



- (A) hexagon (B) oval (C) pentagon
(D) trapezoid

