



# Parts of a Plant and What They Do

Grade 1







Name: \_\_\_\_\_

Write the correct letter next to each number.



## Match the Plant Parts to Their Jobs

### COLUMN A

1.   Roots
2.   Stem
3.   Leaf
4.   Flower
5.   Seed
6.   Fruit

### COLUMN B

- A** Absorbs water and nutrients from the soil.
- B** Carries water and food to other parts of the plant.
- C** Makes food for the plant using sunlight.
- D** Helps the plant make new seeds.
- E** Can grow into a new plant.
- F** Protects the seeds inside.

