



Parts of a Plant and What They Do

Grade 2







Name: _____

Write the correct letter next to each number.



Match the Plant Parts to Their Functions

COLUMN A

1.  Roots
2.  Stem
3.  Leaves
4.  Flower
5.  Fruit
6.  Seed

COLUMN B

- A** Can grow into a new plant.
- B** Helps the plant make seeds and attracts pollinators.
- C** Holds the plant in the ground and takes in water.
- D** Makes food for the plant using sunlight.
- E** Protects the seeds inside and helps spread them.
- F** Carries water and food to all parts of the plant.

