



Weather Tools: How Scientists Measure the Sky

Grade 2







Name: _____

Write the correct letter next to each number.



Match Weather Tools to Their Uses

COLUMN A

1.  Thermometer
2.  Rain gauge
3.  Wind vane
4.  Anemometer
5.  Snow gauge
6.  Weather balloon

COLUMN B

- A** Measures how much rain has fallen.
- B** Measures how much snow has fallen.
- C** Measures how fast the wind blows.
- D** Carries tools high into the sky to collect weather data.
- E** Shows which way the wind is blowing.
- F** Measures how hot or cold it is.

