



## Parts of a Plant and What They Do

Grade 3







Name: \_\_\_\_\_

Write the correct letter next to each number.



### Match Plant Parts to Their Jobs

#### COLUMN A

1.   Roots
2.   Stem
3.   Leaf
4.   Flower
5.   Seed
6.   Fruit

#### COLUMN B

- A. Contains a tiny plant and grows into a new plant.
- B. Protects the seeds and helps with dispersal.
- C. Absorbs water and nutrients from the soil.
- D. Makes food for the plant using sunlight.
- E. Attracts pollinators and makes seeds.
- F. Supports the plant and carries water and food.

