









Write the correct letter next to each number.



Match Weather Tools to What They Measure

COLUMN A

1.  Thermometer
2.  Rain Gauge
3.  Wind Vane
4.  Anemometer
5.  Barometer
6.  Weather Satellite

COLUMN B

- A** measures how fast the wind is blowing.
- B** takes pictures of clouds and weather from space.
- C** measures how hot or cold the air is.
- D** shows which direction the wind is blowing from.
- E** collects and measures how much rain has fallen.
- F** measures air pressure.

